

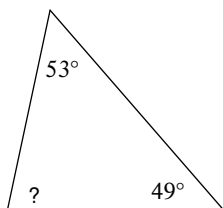
Unit 4 Worksheet 2 - Angle Sums

© 2013 Kuta Software LLC. All rights reserved.

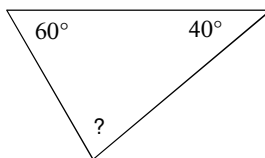
Date _____ Period _____

Find the measure of each angle indicated. Classify the triangle by its angles.

1)

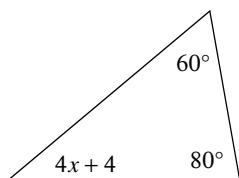


2)

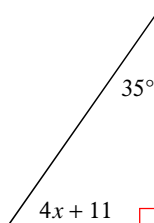


Solve for x.

3)

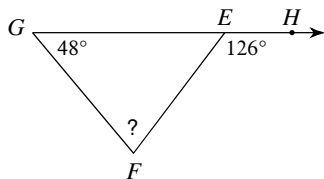


4)

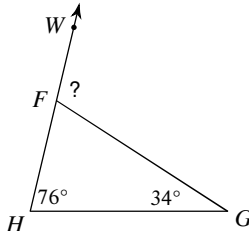


Find the measure of each angle indicated.

5)

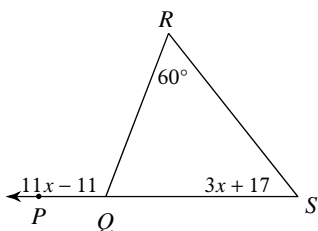


6)

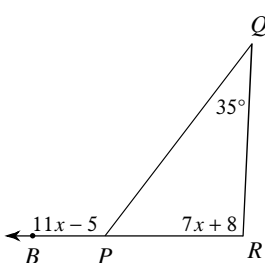


Solve for x.

7)

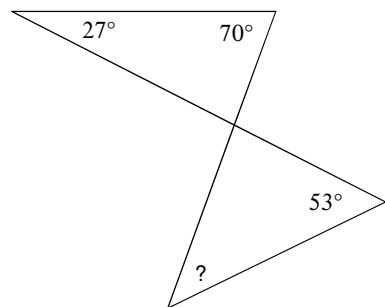


8)

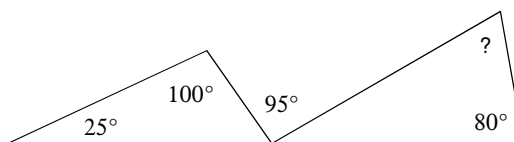


Find the measure of each angle indicated.

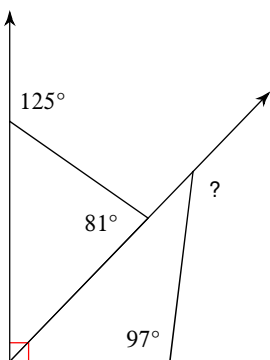
9)



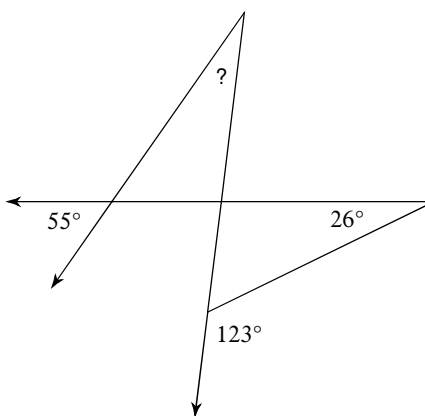
10)



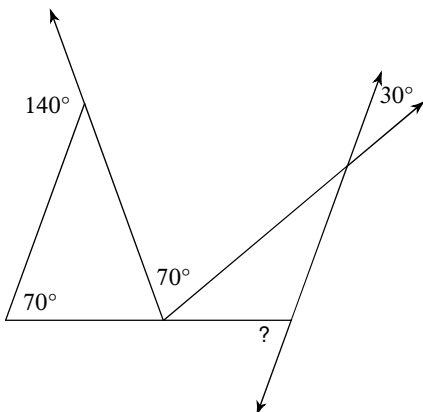
11)



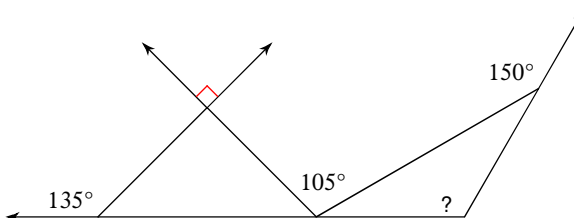
12)



13)



14)



Answers to Unit 4 Worksheet 2 - Angle Sums (ID: 1)

1) 78°

2) 80°

3) 9

4) 11

5) 78°

6) 110°

7) 11

8) 12

9) 44°

10) 70°

11) 143°

12) 28°

13) 70°

14) 120°